



BARODA HIGH SCHOOL, ONGC (Afternoon Shift)

Primary Section

UT- I Examination : 2025-26



Subject:- MATHS

Name:\_\_\_\_\_ Roll No:-\_\_\_\_\_ Std. : III Div:\_\_\_ Marks: 30

Date: 01/08/2025 Invg. Sign. \_\_\_\_\_ Examiner's Sign \_\_\_\_\_ Marks

Obtained \_\_\_/30


Q.1 (A) Given below are some pictures. Write the views from where these objects have been seen in the blank provided. (Top, Side, Front views) (2)



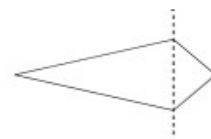
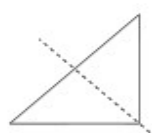
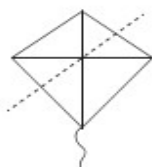
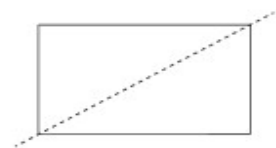
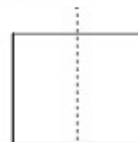
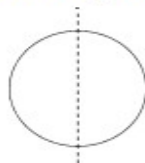
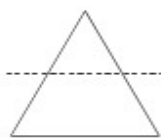
(B) Use the dot grid given below to draw the following shapes. (2)

a. Leaf

b. Kite



(C) Look at the pictures given below. Tick (✓) and cross (x) the pictures which are divided into two mirror halves by the dotted line. (4)



(D) Answer the following questions:

(2)

i. Which is the smallest 2-digit number? \_\_\_\_\_

ii. Which is greater 1000 or 100? \_\_\_\_\_

iii. 1 century = \_\_\_\_\_ runs.

iv.  $9 \times 2 =$  \_\_\_\_\_

Q.2(A) Find the following words by looking at their halves and write in the given box. One has been done for you. (3)

(a)

**BOOK**

BOOK

(b)

**LINE**

(c)

**DECT**

(d)

**LIKE**

(B) Fill in the boxes.

(2)

(i)  $198 =$  \_\_\_\_\_ hundreds + \_\_\_\_\_ tens + 8 ones

(ii)  $587 = 5$  hundreds + \_\_\_\_\_ tens + \_\_\_\_\_ ones

(C) Write the numbers to fill in the blanks.

(3)

i. 301, \_\_\_\_\_, \_\_\_\_\_, 304

ii. 999, \_\_\_\_\_, 997, \_\_\_\_\_

iii. \_\_\_\_\_, 100, 101, \_\_\_\_\_

(D) Write the following numbers in words.

(2)

a. 86 - \_\_\_\_\_

b. 402 - \_\_\_\_\_

Q.3(A) Skip count by 5's and write the numbers starting from.

(2)

i). 205, \_\_\_\_\_, \_\_\_\_\_

(B) Arrange the following numbers in ascending and descending order:

(2)

i). 746, 652, 89, 322 -

Ascending order: \_\_\_\_\_

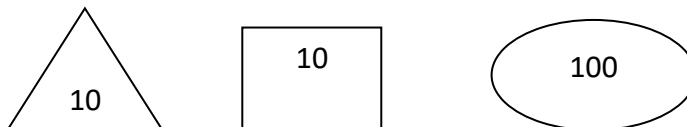
Descending order: \_\_\_\_\_

(C) How many are these? (2)

1.  +  +  =

2.  +  +  +  =

(D) Use the following cards to draw them for the following numbers: (2)



1. 97-

2. 300-

(E) Match the following and write the answers in the given space: (2)

Column A	Column B
1. I am equal to ten notes of 10	a. 150
2. I am century + half century	b. 100
3. I have 9 in my name and i am very close to 90	c. 87
4. I am exactly in between 77 and 97	d. 89

Answers: 1- \_\_\_\_\_ 2- \_\_\_\_\_ 3- \_\_\_\_\_ 4- \_\_\_\_\_

